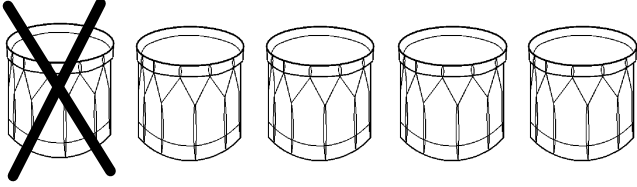


Cross out the items below to help you find the difference. Write the answer in each line.

a.




$$5 - 1 = \underline{\quad}$$

b.



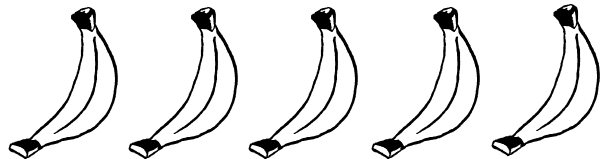
$$5 - 2 = \underline{\quad}$$

c.



$$5 - 3 = \underline{\quad}$$

d.



$$5 - 4 = \underline{\quad}$$